

SUMMER



Review for 1st going into 2nd

{for use with
A Beka curriculum only}



Resource created by Dorcas Grayson

Name: _____ la

1. Mark vowels and circle special sounds! Read each word.

should	bang	water	turtle	patch	fudge
slowly	city	knot	write	trunk	happy
think	wheat	rainy	child	lamb	mind

2. Fill in the before numbers!

99	□	148	
□	162	□	215
□	54	□	80
□	236	□	179
□	127	□	63

3. Write the time that each clock says!

Resource created by Dorcas Grayson

Name: _____ lb

1. Fill in the missing words for each sentence. Choose from the word bank.

On Saturday, my family _____ a baseball game. A batter hit the ball and _____ a home run in the _____ inning. Another _____ sprinted for first base, but he got tagged out. So many of the pitcher's _____ were struck! In the seventh inning, it was _____ cold so I took out our _____ Mom bought popcorn for my sister and I to _____ on the way home. I cannot wait to go watch another _____ soon!

WORD BANK

getting	second
throws	game
blanket	player
scored	shore
watched	

2. Solve each addition problem!

12 + 4 =	7 + 6 =
3 + 8 =	2 + 10 =
8 + 6 =	9 + 5 =
7 + 9 =	11 + 8 =

3. Fill in the missing numbers!

100		103	
	106		
110			
		117	
			124



BENZEL'S
beginnings

Thank you!

You have successfully purchased and downloaded a quality resource from Benzel's Beginnings! Please know that this resource is **only for you and your classroom. You may not copy for or email this product to another teacher.** Instead, please direct him or her to my TpT site.

If you like this product, please leave feedback! This will earn you credits to use for other products on TpT. If you find a mistake or something goes wrong, send me a message on TpT instead of leaving poor feedback. Feel free to follow me to know when I post new products!

Printing Tip

{especially if you're printing for a whole class of students!}:

Getting ready to print and copy this packet for all of your students? If you are looking to save ink and paper, make sure to print out multiple pages of the answer key on a single sheet of paper! To do this, follow the below steps:

1. First print out page 1 separately so each packet has a cover.
2. Then print out pages 4 - 39 normally.
3. Then print out pages 40 - 63 using special settings. Click Print to bring up the settings window. Under "pages to print" select the bubble next to pages and type in 40 - 63. Under "page sizing and handling" click on multiple. Change "pages to print" to 4 and leave __x__ blank. Then change the orientation to landscape. In the preview window, you should see 4 answer key pages fitting perfectly on one single sheet. Everything shows up clear and easy-to-see, even when printing this way.

Doing this allows you to print the 24 page answer key on only 6 pages, making it a lot easier to print out and copy the answer key for parent use!

Name: _____

la

1. Mark vowels and circle special sounds! Read each word.

should bang water turtle patch fudge
 slowly city knot write trunk happy
 think wheat rainy child lamb mind

2. Fill in the before numbers!

99

148

162

215

54

80







236

179

127

63

3. Write the time that each clock says!



Name: _____

16

1. Fill in the missing words for each sentence. Choose from the word bank.

On Saturday, my family _____ a baseball game. A batter hit the ball and _____ a home run in the _____ inning. Another _____ sprinted for first base, but he got tagged out. So many of the pitcher's _____ were strikes! In the seventh inning, it was _____ cold so I took out our _____.

Mom bought popcorn for my sister and I to _____ on the way home. I cannot wait to go watch another _____ soon!

WORD BANK

getting	second
throws	game
blanket	player
scored	share
watched	

2. Solve each addition problem!

$12 + 4 = \bigcirc$

$7 + 6 = \bigcirc$

$3 + 8 = \bigcirc$

$2 + 10 = \bigcirc$

$8 + 6 = \bigcirc$

$9 + 5 = \bigcirc$

$7 + 9 = \bigcirc$

$11 + 8 = \bigcirc$

3. Fill in the missing numbers!

100			103	
	106			
110				
		117		
				124

Name: _____

lc

1. Copy the sentence below in your best handwriting.

The jet plane zoomed by in the bright blue sky!

2. Write about a favorite memory from first grade.

Name: _____

2a

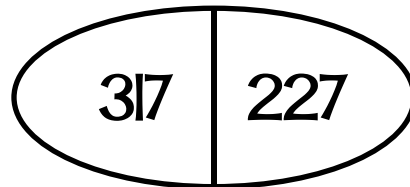
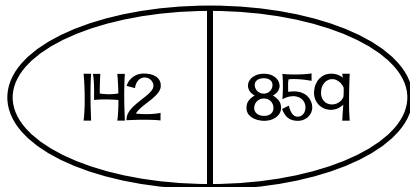
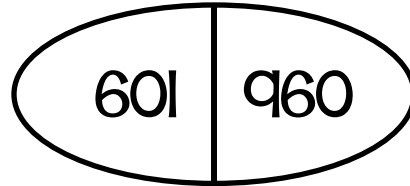
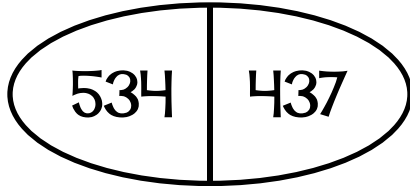
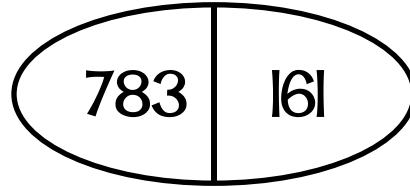
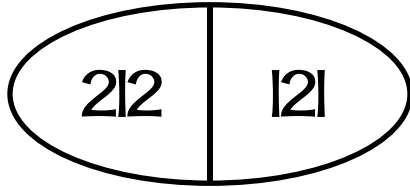
1. Circle the suffix or prefix in each word. Then underline the root word.

undone ringing asleep jumped tallest

sharpen also softly enlarge harder

below painted away watches dirty

2. In each oval, color the half with the greater number.



3. Write how many cents there are.



Name: _____

2b

1. Solve. Color the popsicles by the code:

Answers less than 50 color red, more than 50 color blue

$$\begin{array}{r} 25 \\ + 62 \\ \hline \end{array}$$

$$\begin{array}{r} 84 \\ - 30 \\ \hline \end{array}$$

$$\begin{array}{r} 17 \\ + 31 \\ \hline \end{array}$$

$$\begin{array}{r} 46 \\ - 5 \\ \hline \end{array}$$

$$\begin{array}{r} 22 \\ + 23 \\ \hline \end{array}$$

$$\begin{array}{r} 39 \\ + 40 \\ \hline \end{array}$$

$$\begin{array}{r} 78 \\ - 54 \\ \hline \end{array}$$

$$\begin{array}{r} 65 \\ + 14 \\ \hline \end{array}$$

2. Write 2 more rhyming words that rhyme with the word in the first box.

might →

hold →

trust →

care →

found →

Name: _____

2c

1. Copy the sentence below in your best handwriting!

Do you like to dance when music is playing?

2. Write AT LEAST three facts about your favorite animal.

Name: _____

3a

1. Add the suffix -ing to each root word and write it on the line. Read your new word!


****DON'T FORGET to double the final consonant! Always do this for root words that only have one consonant after the short vowel!****

hop _____ cut _____ beg _____


get _____ dig _____ mop _____

rip _____ sit _____ bat _____


2. Draw hands on the clock to match the time.




6:05




1:45




8:55



3:25



11:20



10:30

3. Write the number that comes after in each box.

199

78

316

247

105

410

84

123

252

309

Name: _____

3b

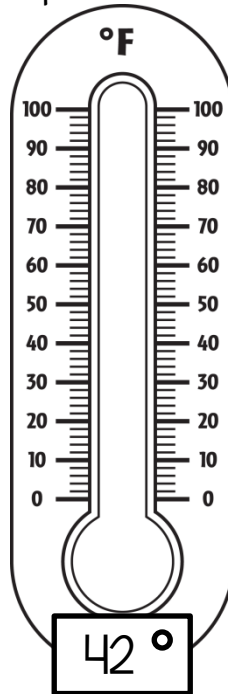
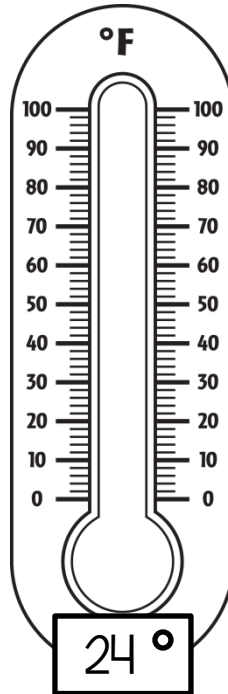
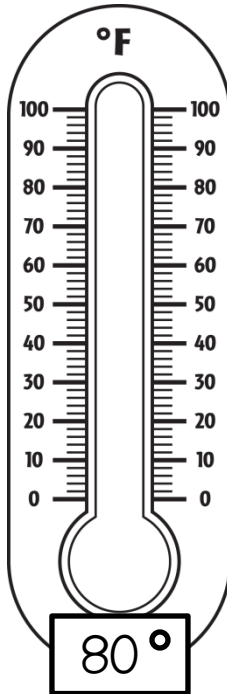
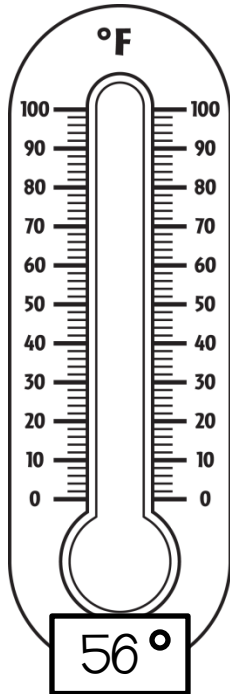
1. Read each word. Then chose 5 words from below to draw a picture of on the back.

caught mountain reading eight thunder

pencil thought alarm garden place

sloppy trusted giraffe teacher kitchen

2. Color each thermometer to match the temperature.



3. Write a greater than > or less than < sign in each blank.

108 ___ 180

67 ___ 52

126 ___ 116

99 ___ 213

229 ___ 130

744 ___ 591

454 ___ 603

179 ___ 107

147 ___ 372

286 ___ 365

Name: _____

3c

1. Copy the sentence below in your best handwriting!

There are seven days in every week of the year.

2. Write about some ways you can show God's love to people in your family.

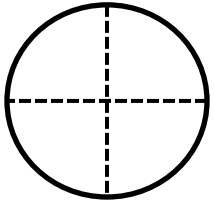
Name: _____

4a

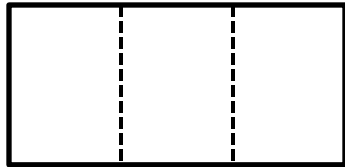
1. Add the suffixes -er and -est to each root word. Don't forget that the y becomes a letter i!

	funny	happy	smelly	cloudy
-er →				
-est →				

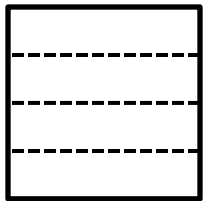
2. Circle the word that describes how many parts each shape is divided into.



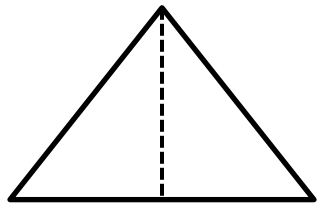
fourths thirds



halves thirds



halves fourths



halves whole

3. Find the sums and differences.

$$\begin{array}{r} 11 \\ -8 \\ \hline \end{array} \quad \begin{array}{r} 6 \\ +5 \\ \hline \end{array} \quad \begin{array}{r} 7 \\ +3 \\ \hline \end{array} \quad \begin{array}{r} 10 \\ -9 \\ \hline \end{array} \quad \begin{array}{r} 8 \\ +4 \\ \hline \end{array} \quad \begin{array}{r} 9 \\ -2 \\ \hline \end{array}$$

$$\begin{array}{r} 2 \\ +10 \\ \hline \end{array} \quad \begin{array}{r} 8 \\ -6 \\ \hline \end{array} \quad \begin{array}{r} 4 \\ +5 \\ \hline \end{array} \quad \begin{array}{r} 7 \\ +4 \\ \hline \end{array} \quad \begin{array}{r} 11 \\ -6 \\ \hline \end{array} \quad \begin{array}{r} 10 \\ -5 \\ \hline \end{array}$$

$$\begin{array}{r} 3 \\ +9 \\ \hline \end{array} \quad \begin{array}{r} 12 \\ -6 \\ \hline \end{array} \quad \begin{array}{r} 8 \\ -4 \\ \hline \end{array} \quad \begin{array}{r} 5 \\ +8 \\ \hline \end{array} \quad \begin{array}{r} 9 \\ -7 \\ \hline \end{array} \quad \begin{array}{r} 2 \\ +11 \\ \hline \end{array}$$

Name: _____

46

1. Rewrite the words below in A-B-C (alphabetical) order on the numbered lines.

forest	1.	_____
giraffe	2.	_____
basket	3.	_____
landslide	4.	_____
about	5.	_____

monkey	1.	_____
zoomed	2.	_____
today	3.	_____
painting	4.	_____
reach	5.	_____

2. Answer each math question below.

How many is one dozen?

How many hours are in a day?

How many minutes are in an hour?

How many inches are in a foot?

How many feet are in a yard?

How many inches are in a yard?

3. Fill in the before and after numbers by 5s.

75

120

40

95

105

130

55

160

Name: _____

4c

1. Copy the sentence below in your best handwriting!

What is your favorite part of the school day?

2. If you could go anywhere right now, where would you go? Why?

Name: _____

5a

1. Fill in the missing words for each sentence. Choose from the word bank.

Drew's _____ thing to do is to go on a hike with his friend Luke. Before they leave, they have to pack _____ food for their adventure. Drew's mom makes sure they each have a water _____ too! It is important to drink _____ when you are climbing a _____. Luke loves to find _____ as he walks on the trail and Drew _____ for animals in the trees. They both have to _____ out for rocks and twigs on the ground. Drew is happy he has a friend that likes to go _____ with him!

WORD BANK

mountain
bottle
hiking
favorite
looks
watch
enough
water
animals

2. Carefully complete the addition problems. Add the ones place FIRST. If the ones place adds up to more than 9, don't forget to carry the 1 to the tens place! Make sure to write the 1 and don't forget to add it when you add up the tens place!

$$\begin{array}{r} 55 \\ +36 \\ \hline \end{array}$$

$$\begin{array}{r} 72 \\ +19 \\ \hline \end{array}$$

$$\begin{array}{r} 43 \\ +27 \\ \hline \end{array}$$

$$\begin{array}{r} 38 \\ +52 \\ \hline \end{array}$$

$$\begin{array}{r} 86 \\ +6 \\ \hline \end{array}$$

$$\begin{array}{r} 14 \\ +68 \\ \hline \end{array}$$

$$\begin{array}{r} 47 \\ +24 \\ \hline \end{array}$$

Name: _____

5b

1. Write the correct contraction for each set of words below.

do not →

I am →

can not →

you are →


she will →

does not →

it is →

we have →

2. How many cents are in one dollar?



3. Draw how many quarters you need to make one dollar.

3. Write the before and after numbers by 2s.

<input type="text"/>	22	<input type="text"/>
----------------------	----	----------------------

<input type="text"/>	156	<input type="text"/>
----------------------	-----	----------------------

<input type="text"/>	78	<input type="text"/>
----------------------	----	----------------------

<input type="text"/>	134	<input type="text"/>
----------------------	-----	----------------------

<input type="text"/>	60	<input type="text"/>
----------------------	----	----------------------

<input type="text"/>	98	<input type="text"/>
----------------------	----	----------------------

<input type="text"/>	104	<input type="text"/>
----------------------	-----	----------------------

<input type="text"/>	142	<input type="text"/>
----------------------	-----	----------------------

<input type="text"/>	116	<input type="text"/>
----------------------	-----	----------------------

<input type="text"/>	88	<input type="text"/>
----------------------	----	----------------------

Name: _____

5c

1. Copy the sentence below in your best handwriting!

Carrots, peas and squash grow in the garden.

2. Pretend it is winter and we have a snow day off from school. Write about what happens next!

Name: _____


6a

1. Color the ice cream scoops according to the code:


root words=purple

words with a prefix=yellow

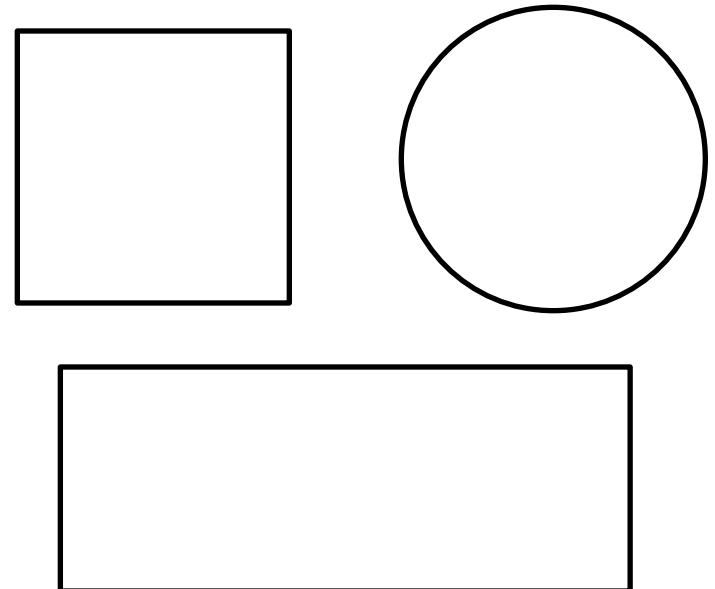
words with a suffix=green



2. Write how many cents you have in each row.



3. Divide each shape into fourths. Color one fourth of each shape.



Name: _____

6c

1. Copy the sentence below in your best handwriting!

I know that each word in the Bible is true.

2. Write about a job you want to have some day and what you would like about it.

Name: _____

7a

1. Read the sentence and draw a line to match it with the correct picture.

Shane cooks yummy pasta with red sauce for his family.







Farmer Joe has horses, cows, chickens and goats in the barn.

When Ann went sailing on the ocean, she felt the wind blow on her face.

Jordan fell and scraped his elbow on the ground, but he is ok!



2. Write the correct time for each clock.



3. Color the boxes with the numbers you need to skip count by 3s from 0 to 30.

0	3	6	8	7	14
16	12	9	10	12	19
17	15	18	21	24	27
20	19	22	23	26	30

Name: _____

7b

1. Write the words below in the correct order to make a sentence on the line.

ladybugs	crawl	Many
log.	the	on

James	the	fold
helping	laundry.	is

pants	with	stripes.
wears	Lucy	

2. Solve each addition problem. Some require you to carry the 1.

$\begin{array}{r} 46 \\ +25 \\ \hline \end{array}$	$\begin{array}{r} 33 \\ +64 \\ \hline \end{array}$	$\begin{array}{r} 82 \\ +10 \\ \hline \end{array}$	$\begin{array}{r} 19 \\ +51 \\ \hline \end{array}$
--	--	--	--

$\begin{array}{r} 90 \\ + 8 \\ \hline \end{array}$	$\begin{array}{r} 12 \\ +47 \\ \hline \end{array}$	$\begin{array}{r} 28 \\ +53 \\ \hline \end{array}$	$\begin{array}{r} 76 \\ + 16 \\ \hline \end{array}$
--	--	--	---

3. Write the before and after numbers by 10s.

<input type="text"/>	90	<input type="text"/>	<input type="text"/>	140	<input type="text"/>
----------------------	----	----------------------	----------------------	-----	----------------------

<input type="text"/>	210	<input type="text"/>	<input type="text"/>	70	<input type="text"/>
----------------------	-----	----------------------	----------------------	----	----------------------

<input type="text"/>	180	<input type="text"/>	<input type="text"/>	150	<input type="text"/>
----------------------	-----	----------------------	----------------------	-----	----------------------

<input type="text"/>	230	<input type="text"/>	<input type="text"/>	200	<input type="text"/>
----------------------	-----	----------------------	----------------------	-----	----------------------

Name: _____

7c

1. Copy the sentence below in your best handwriting!

The green turtle swims slowly in the pond.

2. Pick someone in your family and write about 5 things you like about that person.

Name: _____

8a

1. Read the story and answer the questions below.

Esther is riding in the car to go to a birthday party today. Her friend Liz is turning eight years old! Esther cannot wait to get to Liz's house. She picked out the perfect gift to give to Liz - an art set with paints and stickers and colored paper! Esther also cannot wait to sing "happy birthday" and eat cake. She hopes there is chocolate ice cream too. Most of all, Esther cannot wait to show Liz how much she is happy that they are great friends!

Where is Esther going today?


How old is Liz turning?

What gift did Esther get for Liz?

What food does Esther hope is at the party?

What is Esther most excited about doing?

2. Use the measurement chart to answer the questions below. Then draw your own measurement chart on the back!



C = cup
P = pint
Q = quart
G = gallon

How many quarts are in a gallon?

--

How many cups are in a pint?

--

How many pints are in a gallon?

--

How many pints are in a quart?

--

How many cups are in a gallon?

--

Name: _____

8b

1. Read each word. Then chose 5 words from below to draw a picture of on the back.

bridge

draw

almost

rough

airplane

fountain

award

colorful

arrow

berry

huge

money

some

picture

wrench

2. To help the tractor find the path to the barn, color the boxes by 5s! Start at 100.



100	105	110	140	152	160	110	
134	125	120	115	130	153	171	140
190	130	145	150	155	172	125	136
122	135	140	141	160	135	165	155
145	168	175	170	165	181	153	192
155	170	180	185	190	195	200	



3. Look at each number. Circle the digit in the hundreds place, underline the digit in the tens place and write an X over the digit in the ones place.

364

721

285

109

517

930

648

456

892

Name: _____

8c

1. Copy the sentence below in your best handwriting!

After dinner we will eat chocolate fudge brownies!

2. Imagine you are camping in the forest. What would you do and see?

Name: _____

9a

1. Finish the sentence with your own idea.

The frog _____

I like it when _____

In the jungle _____

2. Color the coins according to the code. Then answer the questions.

quarters = blue dimes = orange
nickels = yellow pennies = red



How many pennies did you find? _____

_____ pennies = _____ ¢

How many nickels did you find? _____

_____ nickels = _____ ¢

How many dimes did you find? _____

_____ dimes = _____ ¢

How many quarters did you find? _____

_____ quarters = _____ ¢

BONUS: How many cents is there in all?

Name: _____

96

1. Rewrite the words in the box in A-B-C (alphabetical) order on the numbered lines.

1. _____
2. _____
3. _____
4. _____
5. _____
6. _____
7. _____
8. _____
9. _____

janitor

station

black

right

needed

yourself

another

kingdom

elephant

2. Fill in the missing + or - sign.

$8 \square 3 = 11$

$6 \square 7 = 13$

$8 \square 5 = 3$

$9 \square 4 = 5$

$10 \square 8 = 2$

$7 \square 4 = 11$

$12 \square 6 = 6$

$5 \square 5 = 10$

$10 \square 3 = 7$

$7 \square 5 = 12$

$11 \square 6 = 5$

$9 \square 5 = 4$

$13 \square 9 = 4$

$9 \square 3 = 12$

$11 \square 2 = 13$

3. Circle the number that is greatest and cross out the number that is least in each row.

132

87

109

223

112

175

168

120

296

319

257

302

140

214

401

104

Name: _____

9c

1. Copy the sentence below in your best handwriting!

My friend laughed when I told a silly joke.

2. Write about your favorite thing to do outside.

Name: _____

10a

1. Draw a line from the picture to the special sound that is in that word.



dge



mb



ph



unk



ear



wa

2. Fill in the before and after numbers by ones.

	22	
--	----	--

	78	
--	----	--

	60	
--	----	--

	104	
--	-----	--

	116	
--	-----	--

	51	
--	----	--

	139	
--	-----	--

	97	
--	----	--

3. Add the suffix -ing to the root words below. Rewrite the new word on the line.

***Don't forget that you have to get rid of the letter e at the end before adding -ing!

Example: hike → hiking

bike _____

make _____

come _____

dive _____

rule _____

slide _____

leave _____

wipe _____

Name: _____

10b

1. Write the words below in the correct order to make a sentence on the line.

swimming	gone	there
you	before?	Have

leaves	Giraffes	trees.
eat	the	in
		high

The	her	baby
stuffed	holds	animal.

2. If the number in the star is odd, color it green. If the number in the star is even, color it blue.

Remember, even numbers end in 0, 2, 4, 6 or 8! 1, 3, 5, 7 and 9 are odd!



3. Write a greater than > or less than < sign in each blank.

234 ___ 372

146 ___ 107

109 ___ 456

582 ___ 213

218 ___ 181

304 ___ 340

212 ___ 220

256 ___ 165

639 ___ 369

199 ___ 201

Name: _____

10c

1. Copy the sentence below in your best handwriting!

Keith turns off the television to play outside.

2. Write four details about one of your favorite things in your bedroom.

Name: _____

lla


1. Mark vowels and circle special sounds! Read each word.


knew carry shouting warm sailboat brought


bottle happy daughter magic seesaw launch


could sphere cherries crumb brownie chalk


2. Write the correct time for each clock.














3. Solve each addition problem. Some require you to carry the 1.

$$\begin{array}{r} 64 \\ + 15 \\ \hline \end{array}$$

$$\begin{array}{r} 23 \\ + 48 \\ \hline \end{array}$$

$$\begin{array}{r} 56 \\ + 30 \\ \hline \end{array}$$

$$\begin{array}{r} 43 \\ + 57 \\ \hline \end{array}$$

$$\begin{array}{r} 31 \\ + 19 \\ \hline \end{array}$$

$$\begin{array}{r} 17 \\ + 14 \\ \hline \end{array}$$

$$\begin{array}{r} 22 \\ + 68 \\ \hline \end{array}$$

$$\begin{array}{r} 75 \\ + 23 \\ \hline \end{array}$$

Name: _____

1. Read the story and answer the questions below.

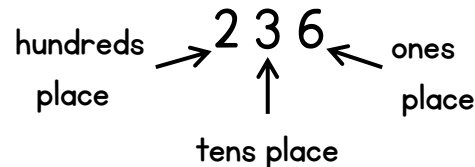
Mike woke up at 8:00 in the morning. He got out of bed, looked out his window and saw that the ground was covered in white. There was snow everywhere! It must have snowed while he was sleeping! Mike hurried to get on his snow pants, jacket, boots and gloves so he could go play. First, he ran through the snow as fast as he could. Then he laid down in the snow to make a snow angel. Next, he rolled three big balls of snow and made a snowman. His favorite thing that he did happened last. His friend Sam came over and they had a big snowball fight! Mike could not believe how much fun he had in the snow. When it was time to go back inside, he said goodbye to Sam, ate some lunch and then went to bed for a nap. He fell asleep so quickly after such an exciting morning!

Why did Mike have such a fun day?

Who was Mike's friend that came to play? _____

What was Mike's favorite thing that he got to do in the snow?

2. Read the directions to write the correct number in the box. Remember:



Write a 1 in the hundreds place, a 4 in the tens place, and a 7 in the ones place:

Write a 6 in the ones place, a 3 in the tens place, and a 2 in the hundreds place:

Write a 0 in the tens place, a 1 in the hundreds place, and a 5 in the ones place:

Write an 8 in the ones place, a 3 in the hundreds place, and a 9 in the tens place:

Write a 2 in the hundreds place, a 6 in the tens place, and a 7 in the ones place:

Name: _____

llc

1. Copy the sentence below in your best handwriting!

I listen to the Bible every night before bed.

2. Write about what you would say when telling someone about Jesus.

Name: _____

12a

1. Write the correct contraction for each set of words below.

we are →

should not →

they have →

I will →

2. Rewrite the root words with the suffixes *-ed* and *-ing*.

These root words stay the same when you add the suffix because they do not end in e and they have 2 consonants after the short vowel.

-ed

-ing

jump


stack

honk

smell

3. Solve each subtraction problem and color the buckets by the code:

3-blue 4-yellow 5-orange 6-green 7-red 8-purple



Name: _____

126

1. Read the sentences and draw a line to match it with the correct picture.

Jill is an artist. He painted a beautiful picture of an orange, purple and pink sunset.

The parrot landed on Grant's shoulder and made a squawking sound in his ear!

Should my family drive somewhere far away on our road trip vacation?

Molly is a cute puppy who likes to chew her bones and chase her squeaky toys.



2. Write how many cents you have in each box. Remember, count your quarters first, then dimes, then nickels and pennies last!

¢

¢

¢

¢

3. Write the missing before and after numbers by 2s.

	108	
	144	
	226	
	90	
	172	

Name: _____

12c

1. Copy the sentence below in your best handwriting!

How does summer vacation go by so fast?

2. Write at least 4 sentences about what you think second grade will be like.

Name: Answer Key

la


1. Mark vowels and circle special sounds! Read each word.

should bang water turtle patch fudge
 slowly city knot write trunk happy
 think wheat rainy child lamb mind


2. Fill in the before numbers!

98	99	147	148
161	162	214	215
53	54	79	80
235	236	178	179
126	127	62	63


3. Write the time that each clock says!




5:10




9:40




12:15



7:00



2:35



4:50

Name: Answer Key

16

1. Fill in the missing words for each sentence. Choose from the word bank.

On Saturday, my family watched a baseball game. A batter hit the ball and scored a home run in the second inning. Another player sprinted for first base, but he got tagged out. So many of the pitcher's throws were strikes! In the seventh inning, it was getting cold so I took out our blanket. Mom bought popcorn for my sister and I to share on the way home. I cannot wait to go watch another game soon!

WORD BANK

getting	second
throws	game
blanket	player
scored	share
watched	

2. Solve each addition problem!

$12 + 4 = 16$

$7 + 6 = 13$

$3 + 8 = 11$

$2 + 10 = 12$

$8 + 6 = 14$

$9 + 5 = 14$

$7 + 9 = 16$

$11 + 8 = 19$

3. Fill in the missing numbers!

100	101	102	103	104
105	106	107	108	109
110	111	112	113	114
115	116	117	118	119
120	121	122	123	124

Name: Answer Key

2a





1. Circle the suffix or prefix in each word. Then underline the root word.

unddone ringing asleep jumped tallest
sharpen also softly enlarge harder
below painted away watches dirty

2. In each oval, color the half with the greater number.

212	121	783	161
534	437	601	960
142	859	317	227

3. Write how many cents there are.

 55 ¢	 77 ¢
 32 ¢	 80 ¢

Name: **Answer Key**

2b

1. Solve. Color the popsicles by the code:

Answers less than 50 color red, more than 50 color blue

$$\begin{array}{r} 25 \\ + 62 \\ \hline 87 \end{array}$$

$$\begin{array}{r} 84 \\ - 30 \\ \hline 54 \end{array}$$

$$\begin{array}{r} 17 \\ + 31 \\ \hline 48 \end{array}$$

$$\begin{array}{r} 46 \\ - 5 \\ \hline 41 \end{array}$$

$$\begin{array}{r} 22 \\ + 23 \\ \hline 45 \end{array}$$

$$\begin{array}{r} 39 \\ + 40 \\ \hline 79 \end{array}$$

$$\begin{array}{r} 78 \\ - 54 \\ \hline 24 \end{array}$$

$$\begin{array}{r} 65 \\ + 14 \\ \hline 79 \end{array}$$

2. Write 2 more rhyming words that rhyme with the word in the first box.

might

Options include:
fight, sight, bright, light,
night, right, bite, height,
knight, write

hold

Options include:
gold, sold, mold, bold, cold,
old, told, fold

trust

Options include:
rust, must, just, crust,
dust, gust

care

Options include:
Hair, hare, share, bare,
bear, pear, pair, wear, air,
tear, rare

found

Options include:
bound, sound, ground,
around, hound, mound,
pound, round

Name: Answer Key

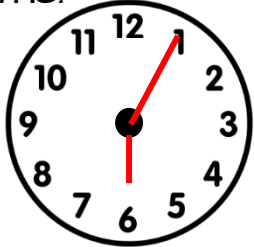
3a

1. Add the suffix -ing to each root word and write it on the line. Read your new word!


DON'T FORGET to double the final consonant! Always do this for root words that only have one consonant after the short vowel!

hop hopping cut cutting beg beggingget getting dig digging mop moppingrip ripping sit sitting bat batting


2. Draw hands on the clock to match the time.




6:05




1:45



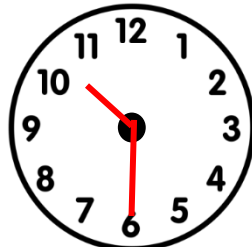
8:55



3:25



11:20



10:30

3. Write the number that comes after in each box.

199

200

78

79

316

317

247

248

105

106

410

411

84

85

123

124

252

253

309

310

Name: **Answer Key**

3b

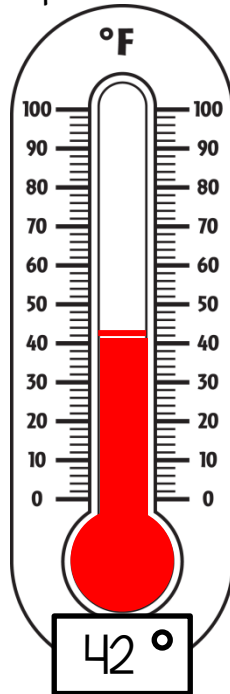
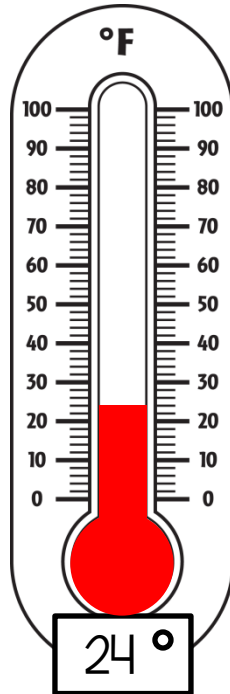
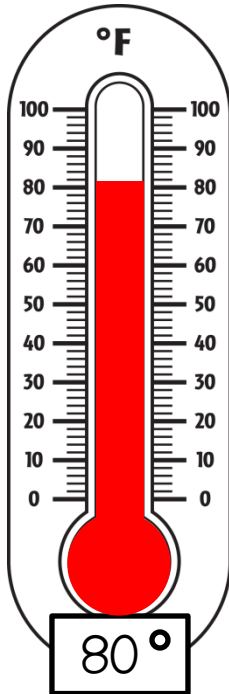
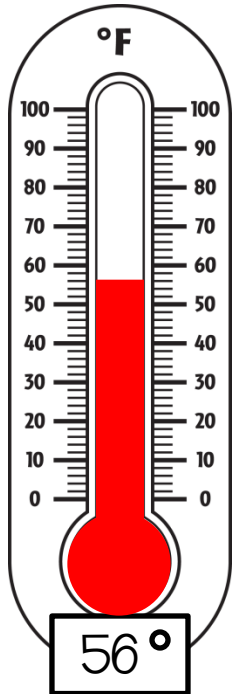
1. Read each word. Then chose 5 words from below to draw a picture of on the back.

caught mountain reading eight thunder

pencil thought alarm garden place

sloppy trusted giraffe teacher kitchen

2. Color each thermometer to match the temperature.



3. Write a greater than > or less than < sign in each blank.

108 < 180

67 > 52

126 > 116

99 < 213

229 > 130

744 > 591

454 < 603

179 > 107

147 < 372

286 < 365

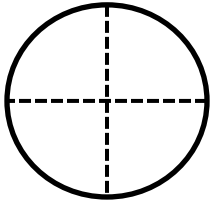
Name: Answer Key

4a

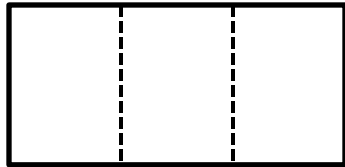
1. Add the suffixes -er and -est to each root word. Don't forget that the y becomes a letter i!

	funny	happy	smelly	cloudy
-er →	funnier	happier	smellier	cloudier
-est →	funniest	happiest	smelliest	cloudier

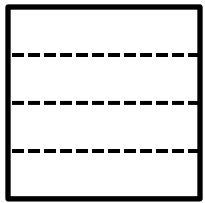
2. Circle the word that describes how many parts each shape is divided into.



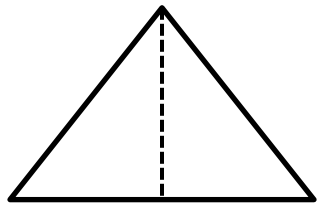
fourths thirds



halves thirds



halves fourths



halves whole

3. Find the sums and differences.

$$\begin{array}{r} 11 \\ -8 \\ \hline 3 \end{array}$$

$$\begin{array}{r} 6 \\ +5 \\ \hline 11 \end{array}$$

$$\begin{array}{r} 7 \\ +3 \\ \hline 4 \end{array}$$

$$\begin{array}{r} 10 \\ -9 \\ \hline 1 \end{array}$$

$$\begin{array}{r} 8 \\ +4 \\ \hline 4 \end{array}$$

$$\begin{array}{r} 9 \\ -2 \\ \hline 7 \end{array}$$

$$\begin{array}{r} 2 \\ +10 \\ \hline 12 \end{array}$$

$$\begin{array}{r} 8 \\ -6 \\ \hline 2 \end{array}$$

$$\begin{array}{r} 4 \\ +5 \\ \hline 9 \end{array}$$

$$\begin{array}{r} 7 \\ +4 \\ \hline 3 \end{array}$$

$$\begin{array}{r} 11 \\ -6 \\ \hline 5 \end{array}$$

$$\begin{array}{r} 10 \\ -5 \\ \hline 5 \end{array}$$

$$\begin{array}{r} 3 \\ +9 \\ \hline 12 \end{array}$$

$$\begin{array}{r} 12 \\ -6 \\ \hline 6 \end{array}$$

$$\begin{array}{r} 8 \\ -4 \\ \hline 4 \end{array}$$

$$\begin{array}{r} 5 \\ +8 \\ \hline 13 \end{array}$$

$$\begin{array}{r} 9 \\ -7 \\ \hline 2 \end{array}$$

$$\begin{array}{r} 2 \\ +1 \\ \hline 13 \end{array}$$

Name: Answer Key

46

1. Rewrite the words below in A-B-C (alphabetical) order on the numbered lines.

forest	1.	<u>about</u>
giraffe	2.	<u>basket</u>
basket	3.	<u>forest</u>
landslide	4.	<u>giraffe</u>
about	5.	<u>landslide</u>

monkey	1.	<u>monkey</u>
zoomed	2.	<u>painting</u>
today	3.	<u>reach</u>
painting	4.	<u>today</u>
reach	5.	<u>zoomed</u>

2. Answer each math question below.

How many is one dozen?

12

How many hours are in a day?

24

How many minutes are in an hour?

60

How many inches are in a foot?

12

How many feet are in a yard?

3

How many inches are in a yard?

36

3. Fill in the before and after numbers by 5s.

70

75

80

115

120

125

35

40

45

90

95

100

100

105

110

125

130

135

50

55

60

155

160

165

Name: **Answer Key****5a**

1. Fill in the missing words for each sentence. Choose from the word bank.

Drew's **favorite** thing to do is to go on a hike with his friend Luke. Before they leave, they have to pack **enough** food for their adventure. Drew's mom makes sure they each have a water **bottle** too! It is important to drink **water** when you are climbing a **mountain**! Luke loves to find **animals** as he walks on the trail and Drew **looks** for animals in the trees. They both have to **watch** out for rocks and twigs on the ground. Drew is happy he has a friend that likes to go **hiking** with him!

WORD BANK

mountain
bottle
hiking
favorite
looks
watch
enough
water
animals

2. Carefully complete the addition problems. Add the ones place FIRST. If the ones place adds up to more than 9, don't forget to carry the 1 to the tens place! Make sure to write the 1 and don't forget to add it when you add up the tens place!

$$\begin{array}{r} 1 \\ 55 \\ + 36 \\ \hline 91 \end{array}$$

$$\begin{array}{r} 1 \\ 72 \\ + 19 \\ \hline 91 \end{array}$$

$$\begin{array}{r} 1 \\ 43 \\ + 27 \\ \hline 70 \end{array}$$

$$\begin{array}{r} 1 \\ 38 \\ + 52 \\ \hline 90 \end{array}$$

$$\begin{array}{r} 1 \\ 86 \\ + 6 \\ \hline 92 \end{array}$$

$$\begin{array}{r} 1 \\ 14 \\ + 68 \\ \hline 82 \end{array}$$

$$\begin{array}{r} 1 \\ 47 \\ + 24 \\ \hline 71 \end{array}$$

Name: Answer Key

5b

1. Write the correct contraction for each set of words below.

do not → don't

I am → I'm

can not → can't

you are → you're

she will → she'll

does not → doesn't


it is → it's

we have → we've

2. How many cents are in one dollar?

100 ¢

3. Draw how many quarters you need to make one dollar.



3. Write the before and after numbers by 2s.

20

22

24

154

156

158

76

78

80

132

134

136

58

60

62

96

98

100

102

104

106

140

142

144

114

116

118

86

88

90

Name: Answer Key

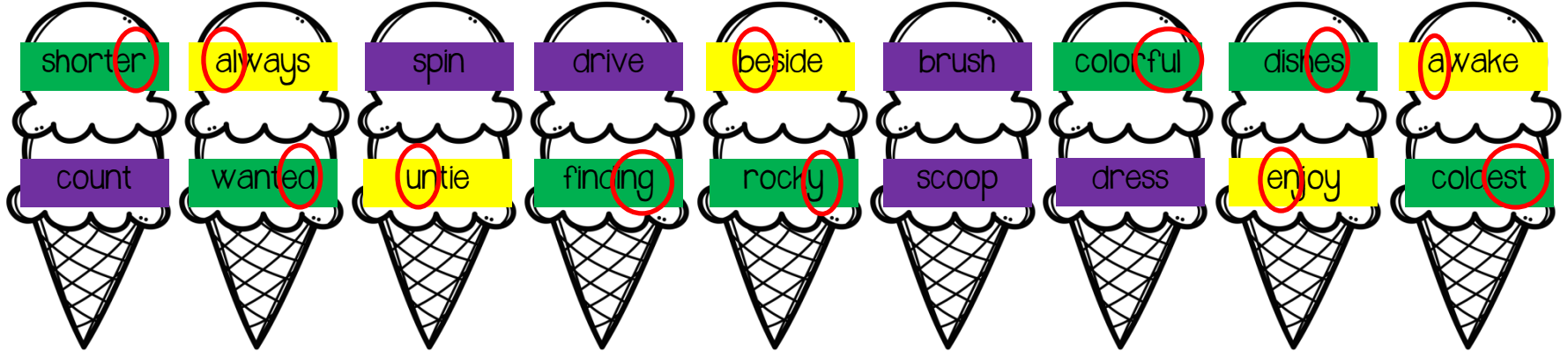
6a

1. Color the ice cream scoops according to the code:

root words=purple

words with a prefix=yellow

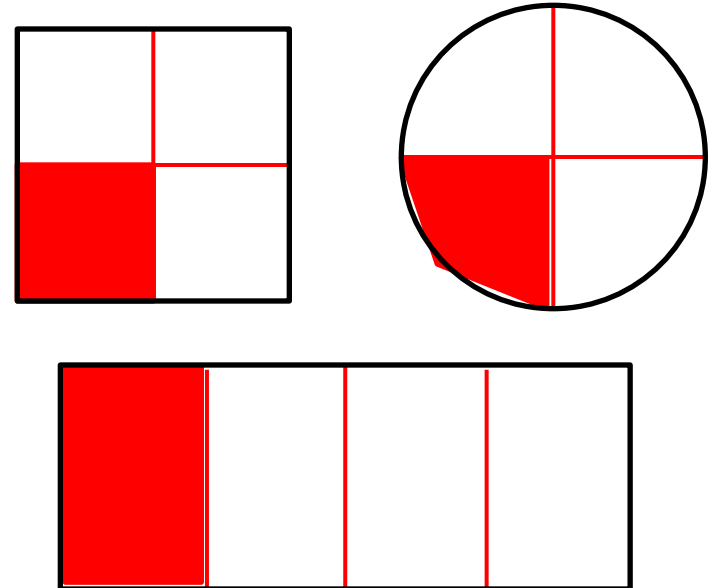
words with a suffix=green



2. Write how many cents you have in each row.

	75 ¢
	67 ¢
	55 ¢
	90 ¢

3. Divide each shape into fourths. Color one fourth of each shape.



Name: **Answer Key**

6b

1. Write the opposite word underneath.

light

tall

day

dark

short

night

awake

up

brother

asleep

down

sister

2. Write two more rhyming words.

space → place, race, lace, face, trace

drink → think, wink, rink, sink, pink, blink

sleep → keep, sweep, beep, jeep, deep, weep

bunch → munch, crunch, lunch, punch

3. Complete the subtraction problems.

8	11	10	12	9
-5	-3	-9	-6	-2
3	8	1	6	7

8	9	12	11	10
-6	-5	-9	-6	-5
2	4	3	5	5

10	8	11	9	12
-6	-4	-5	-7	-3
4	4	6	2	9

4. Write the numbers in order from least to greatest.

least 46, 120, 82, 21, 99, 105 greatest

21 46 82 99 105 120

least 200, 164, 175, 89, 100, 210 greatest

89 100 164 175 200 210

least 256, 307, 300, 193, 324, 235 greatest

193 235 256 300 307 324

Name: Answer Key

7a


1. Read the sentence and draw a line to match it with the correct picture.

Shane cooks yummy pasta with red sauce for his family.


Farmer Joe has horses, cows, chickens and goats in the barn.

When Ann went sailing on the ocean, she felt the wind blow on her face.


Jordan fell and scraped his elbow on the ground, but he is ok!




2. Write the correct time for each clock.




3:10




8:35




5:45



2:55



12:05



4:25

3. Color the boxes with the numbers you need to skip count by 3s from 0 to 30.

0	3	6	8	7	14
16	12	9	10	12	19
17	15	18	21	24	27
20	19	22	23	26	30

Name: **Answer Key**

7b

1. Write the words below in the correct order to make a sentence on the line.

ladybugs	crawl	Many
log.	the	on

Many ladybugs crawl on the log.

James	the	fold
helping	laundry.	is

James is helping fold the laundry.

pants	with	stripes.
wears	Lucy	

Lucy wears pants with stripes.

2. Solve each addition problem. Some require you to carry the 1.

$\begin{array}{r} 1 \\ 46 \\ +25 \\ \hline 71 \end{array}$	$\begin{array}{r} 33 \\ +64 \\ \hline 97 \end{array}$	$\begin{array}{r} 82 \\ +10 \\ \hline 92 \end{array}$	$\begin{array}{r} 1 \\ 19 \\ +51 \\ \hline 70 \end{array}$
--	---	---	--

$\begin{array}{r} 90 \\ +8 \\ \hline 98 \end{array}$	$\begin{array}{r} 12 \\ +47 \\ \hline 59 \end{array}$	$\begin{array}{r} 1 \\ 28 \\ +53 \\ \hline 81 \end{array}$	$\begin{array}{r} 1 \\ 76 \\ +16 \\ \hline 92 \end{array}$
--	---	--	--

3. Write the before and after numbers by 10s.

$\boxed{80}$	90	$\boxed{100}$	$\boxed{130}$	140	$\boxed{150}$
--------------	----	---------------	---------------	-----	---------------

$\boxed{200}$	210	$\boxed{220}$	$\boxed{60}$	70	$\boxed{80}$
---------------	-----	---------------	--------------	----	--------------

$\boxed{170}$	180	$\boxed{190}$	$\boxed{140}$	150	$\boxed{160}$
---------------	-----	---------------	---------------	-----	---------------

$\boxed{220}$	230	$\boxed{240}$	$\boxed{190}$	200	$\boxed{210}$
---------------	-----	---------------	---------------	-----	---------------

Name: Answer Key

8a

1. Read the story and answer the questions below.

Esther is riding in the car to go to a birthday party today. Her friend Liz is turning eight years old! Esther cannot wait to get to Liz's house. She picked out the perfect gift to give to Liz - an art set with paints and stickers and colored paper! Esther also cannot wait to sing "happy birthday" and eat cake. She hopes there is chocolate ice cream too. Most of all, Esther cannot wait to show Liz how much she is happy that they are great friends!

Where is Esther going today?

She is going to a birthday party.

How old is Liz turning?

Liz is turning eight years old.

What gift did Esther get for Liz?

She got Liz an art set with paints and paper.


What food does Esther hope is at the party?

She hopes that there is cake and chocolate ice cream.

What is Esther most excited about doing?

Esther is most excited to show Liz how happy she is that they are friends.

2. Use the measurement chart to answer the questions below. Then draw your own measurement chart on the back!



C = cup
P = pint
Q = quart
G = gallon

How many quarts are in a gallon?

4

How many cups are in a pint?

2

How many pints are in a gallon?

8

How many pints are in a quart?

2

How many cups are in a gallon?

16

Name: Answer Key

8b

1. Read each word. Then chose 5 words from below to draw a picture of on the back.

bridge draw almost rough airplane

fountain award colorful arrow berry

huge money some picture wrench

2. To help the tractor find the path to the barn, color the boxes by 5s! Start at 100.



	100	105	110	140	152	160	110
134	125	120	115	130	153	171	140
190	130	145	150	155	172	125	136
122	135	140	141	160	135	165	155
145	168	175	170	165	181	153	192
155	170	180	185	190	195	200	



3. Look at each number. Circle the digit in the hundreds place, underline the digit in the tens place and write an X over the digit in the ones place.

364

721

285

109

517

930

648

456

897

Name: Answer Key

9a

1. Finish the sentence with your own idea.

The frog _____


Students will finish each sentence with their own creative idea!

I like it when _____

In the jungle _____

2. Color the coins according to the code. Then answer the questions.

quarters = blue dimes = orange
nickels = yellow pennies = red



How many pennies did you find? 7

7 pennies = 7 ¢

How many nickels did you find? 7

7 nickels = 35 ¢

How many dimes did you find? 8

8 dimes = 80 ¢

How many quarters did you find? 4

4 quarters = 100 ¢

BONUS: How many cents is there in all? 222¢ or \$2.22

Name: Answer Key

96

1. Rewrite the words in the box in A-B-C (alphabetical) order on the numbered lines.

janitor

station

black

right

needed

yourself

another

kingdom

elephant

1. another2. black3. elephant4. janitor5. kingdom6. needed7. right8. station9. yourself

2. Fill in the missing + or - sign.

$8 + 3 = 11$

$6 + 7 = 13$

$8 - 5 = 3$

$9 - 4 = 5$

$10 - 8 = 2$

$7 + 4 = 11$

$12 - 6 = 6$

$5 + 5 = 10$

$10 - 3 = 7$

$7 + 5 = 12$

$11 - 6 = 5$

$9 - 5 = 4$

$13 - 9 = 4$

$9 + 3 = 12$

$11 + 2 = 13$

3. Circle the number that is greatest and cross out the number that is least in each row.

132

~~109~~

109

223

~~175~~

175

168

120

296

319

~~217~~

302

140

214

401

~~100~~

Name: Answer Key

10a

1. Draw a line from the picture to the special sound that is in that word.



dge



mb



ph



unk



ear



wa

2. Fill in the before and after numbers by ones.

21

22

23

77

78

79

59

60

61

103

104

105

115

116

117

50

51

52

138

139

140

96

97

98

3. Add the suffix -ing to the root words below. Rewrite the new word on the line.

***Don't forget that you have to get rid of the letter e at the end before adding -ing!

Example: hike → hiking

bike

biking

make

making

come

coming

dive

diving

rule

ruling

slide

sliding

leave

leaving

wipe

wiping

Name: Answer Key

10b

1. Write the words below in the correct order to make a sentence on the line.

swimming	gone	there
you	before?	Have

Have you gone swimming there before?

leaves	Giraffes	trees.
eat	the	in high

Giraffes eat leaves high in the trees.

The	her	baby
stuffed	holds	animal.

The baby holds her stuffed animal.

2. If the number in the star is odd, color it green. If the number in the star is even, color it blue.

Remember, even numbers end in 0, 2, 4, 6 or 8! 1, 3, 5, 7 and 9 are odd!



3. Write a greater than > or less than < sign in each blank.

234 < 372

146 > 107

109 < 456

582 > 213

218 > 181

304 < 340

212 < 220

256 > 165

639 > 369

199 < 201


Name: Answer Key

lla


1. Mark vowels and circle special sounds! Read each word.

knew carry shouting warm sailboat brought
 bottle happy daughter magic seesaw launch
 could sphere cherries crumb brownie chalk


2. Write the correct time for each clock.




7:30




1:20




11:10



6:50



10:10



9:25

3. Solve each addition problem. Some require you to carry the 1.

	1		1
64	23	56	43
+ 15	+ 48	+ 30	+ 57
<hr/>	<hr/>	<hr/>	<hr/>
79	71	86	100
	1		
31	17	22	75
+ 19	+ 14	+ 68	+ 23
<hr/>	<hr/>	<hr/>	<hr/>
50	31	90	98

Name: **Answer Key**

1. Read the story and answer the questions below.

Mike woke up at 8:00 in the morning. He got out of bed, looked out his window and saw that the ground was covered in white. There was snow everywhere! It must have snowed while he was sleeping! Mike hurried to get on his snow pants, jacket, boots and gloves so he could go play. First, he ran through the snow as fast as he could. Then he laid down in the snow to make a snow angel. Next, he rolled three big balls of snow and made a snowman. His favorite thing that he did happened last. His friend Sam came over and they had a big snowball fight! Mike could not believe how much fun he had in the snow. When it was time to go back inside, he said goodbye to Sam, ate some lunch and then went to bed for a nap. He fell asleep so quickly after such an exciting morning!

Why did Mike have such a fun day?

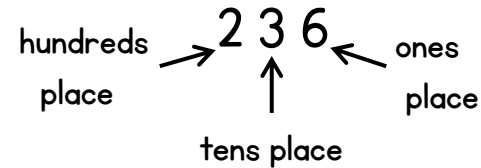
Mike had a fun day because he got to do lots of fun things out in the snow.

Who was Mike's friend that came to play? **Sam**

What was Mike's favorite thing that he got to do in the snow?

His favorite thing was when he had a snowball fight with his friend Sam.

2. Read the directions to write the correct number in the box. Remember:



Write a 1 in the hundreds place, a 4 in the tens place, and a 7 in the ones place:

147

Write a 6 in the ones place, a 3 in the tens place, and a 2 in the hundreds place:

236

Write a 0 in the tens place, a 1 in the hundreds place, and a 5 in the ones place:

105

Write an 8 in the ones place, a 3 in the hundreds place, and a 9 in the tens place:

398

Write a 2 in the hundreds place, a 6 in the tens place, and a 7 in the ones place:

267

Name: Answer Key

12a

1. Write the correct contraction for each set of words below.

we are → we're

should not → shouldn't

they have → they've

I will → I'll

2. Rewrite the root words with the suffixes -ed and -ing.

These root words stay the same when you add the suffix because they do not end in e and they have 2 consonants after the short vowel.

-ed

-ing

jump

jumped

jumping

stack

stacked

stacking

honk

honked

honking


smell

smelled

smelling

3. Solve each subtraction problem and color the buckets by the code:

3-blue 4-yellow 5-orange 6-green 7-red 8-purple



Name: Answer Key

126


1. Read the sentences and draw a line to match it with the correct picture.

Jill is an artist. He painted a beautiful picture of an orange, purple and pink sunset.

The parrot landed on Grant's shoulder and made a squawking sound in his ear!

Should my family drive somewhere far away on our road trip vacation?

Molly is a cute puppy who likes to chew her bones and chase her squeaky toys.



2. Write how many cents you have in each box. Remember, count your quarters first, then dimes, then nickels and pennies last!

Box 1: 2 quarters, 1 dime, 1 nickel, 1 penny. Total: 95¢

Box 2: 1 quarter, 1 dime, 1 nickel, 1 penny. Total: 67¢

Box 3: 2 quarters, 1 dime, 1 nickel, 1 penny. Total: 92¢

Box 4: 1 quarter, 1 dime, 1 nickel, 1 penny. Total: 81¢

3. Write the missing before and after numbers by 2s.

106	108	110
142	144	146
224	226	228
88	90	92
170	172	174

LIKE THIS RESOURCE?

Click below for more you may enjoy:

SUMMER
Review for K going into 1st
(For use with A Beka curriculum only)

Name: _____

3a. Write the number that comes after.

78	20
46	68
42	31
39	51
1	89

Resource created by Benzel's Beginnings

Let's practice...
SPECIAL SOUNDS
{SET ONE}

Let's Learn the Sound: ck

Let's Learn the Sound: st

Let's Learn the Sound: sh

Let's Learn the Sound: pl

Let's Learn the Sound: my my by by

Let's Learn the Sound: be

Let's Learn the Sound: me

Let's Learn the Sound: y

Resource created by Benzel's Beginnings

Let's practice...
SPECIAL SOUNDS
{SET TWO}

Let's Learn the Sound: spl

Let's Learn the Sound: sn

Let's Learn the Sound: tw

Let's Learn the Sound: cr

Let's Learn the Sound: or

Let's Learn the Sound: sm

Resource created by Benzel's Beginnings

Telling Time
Practice with

:00 :15 :30 :45

Name: _____

Match the time to the hour + half.

Draw & Paste the Time

Resource created by Benzel's Beginnings

SUBTRACTION
COLOR BY CODE
•20 printables •3 levels
•differences equal 10 and under

Name: _____

Solve the subtraction problems. Color the pictures according to the key.

0 - orange, 1 - blue, 2 - yellow, 3 - red, 4 - green

Resource created by Benzel's Beginnings

Ordinal Number
Clip Cards

1st 2nd 3rd 4th 5th 6th 7th 8th 9th 10th

3rd 4th 5th 6th 7th 8th

2nd 3rd 4th 5th 6th 7th

30 cards!
Perfect for a math center!

Resource created by Benzel's Beginnings

Practice with
DIGRAPHS

sh

ch

th

Name: _____

MATCH THE SENTENCES

Digraph Matching

Resource created by Benzel's Beginnings

CHRISTIAN
Writing Prompts

10 prompts!

3 levels to meet various student abilities K - 2nd

Level 1 Level 2 Level 3


Name: _____

Name: _____

Name: _____

Resource created by Benzel's Beginnings

The clipart and graphics used in this product are by:



Resource
created by
Benzel's
Beginnings